

Name: \_\_\_\_\_

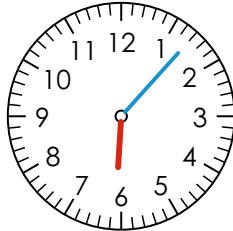
Datum: \_\_\_\_\_

## Uhrzeiten

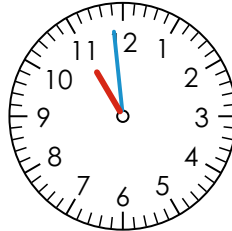
Schreibe beide Uhrzeiten hin. Kontrolliere auf der Rückseite die Lösung selbst.



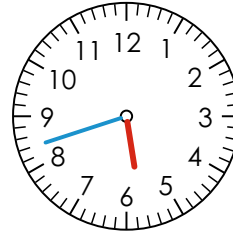
\_\_\_\_\_ Uhr



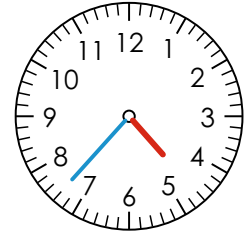
\_\_\_\_\_ Uhr



\_\_\_\_\_ Uhr



\_\_\_\_\_ Uhr



\_\_\_\_\_ Uhr

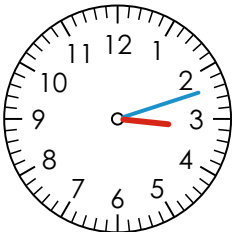
\_\_\_\_\_ Uhr

\_\_\_\_\_ Uhr

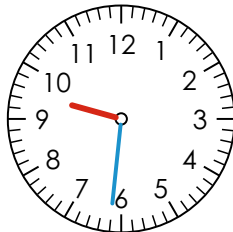
\_\_\_\_\_ Uhr

\_\_\_\_\_ Uhr

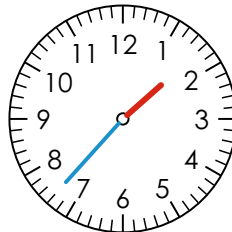
\_\_\_\_\_ Uhr



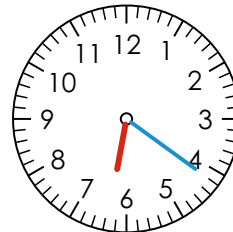
\_\_\_\_\_ Uhr



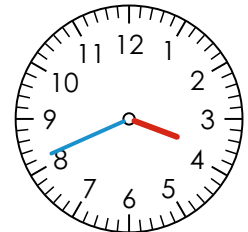
\_\_\_\_\_ Uhr



\_\_\_\_\_ Uhr



\_\_\_\_\_ Uhr



\_\_\_\_\_ Uhr

\_\_\_\_\_ Uhr


\_\_\_\_\_ Uhr

\_\_\_\_\_ Uhr


\_\_\_\_\_ Uhr

\_\_\_\_\_ Uhr


Zeichne die Zeiger ein. Achte darauf, dass der Minutenzeiger blau und der Stundenzeiger rot ist. Der Stundenzeiger ist kürzer als der Minutenzeiger und „wandert mit“! Kontrolliere die Lösung auf der Rückseite.




4:54 Uhr




10:22 Uhr



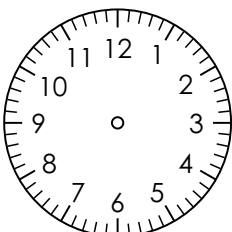
7:30 Uhr




20:35 Uhr




1:36 Uhr




20:08 Uhr




9:36 Uhr



12:35 Uhr








10:31 Uhr



3:11 Uhr

Zeichne die Zeiger richtig ein. Unten findest du die LÖSUNG der Vorderseite.



12:44 Uhr

6:07 Uhr

10:59 Uhr

5:42 Uhr

4:37 Uhr





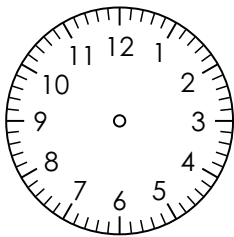
0:44 Uhr

18:07 Uhr

22:59 Uhr

17:42 Uhr

16:37 Uhr



3:12 Uhr

9:31 Uhr

1:37 Uhr

6:21 Uhr

3:41 Uhr

15:12 Uhr

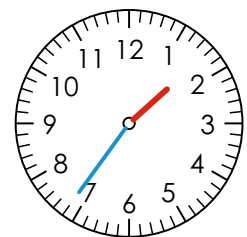
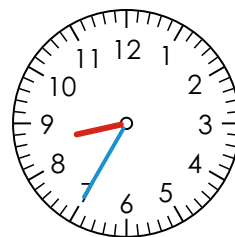
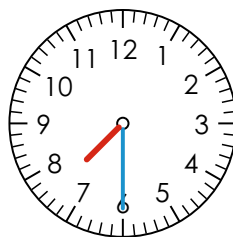
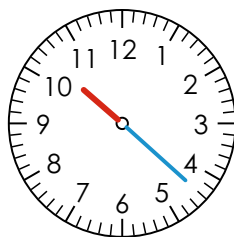
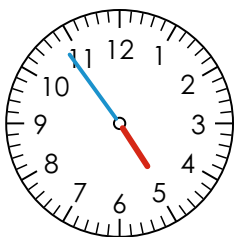
21:31 Uhr

13:37 Uhr

18:21 Uhr

15:41 Uhr

Hier findest du die LÖSUNG der Zeiger. Schreibe die richtige Uhrzeit darunter. Vergleiche mit der Vorderseite.



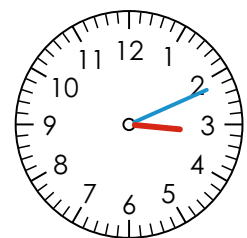
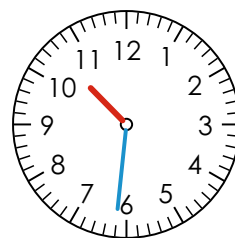
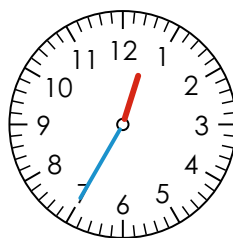
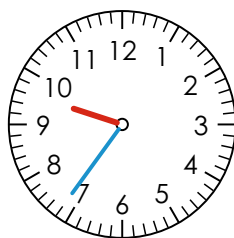
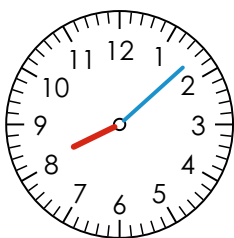
\_\_\_\_\_ Uhr

\_\_\_\_\_ Uhr

\_\_\_\_\_ Uhr

\_\_\_\_\_ Uhr

\_\_\_\_\_ Uhr



\_\_\_\_\_ Uhr

\_\_\_\_\_ Uhr

\_\_\_\_\_ Uhr

\_\_\_\_\_ Uhr

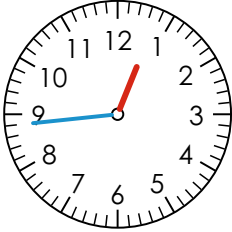
\_\_\_\_\_ Uhr

Name: \_\_\_\_\_

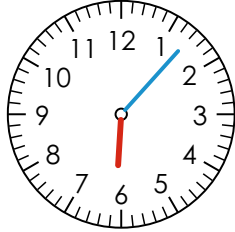
Datum: \_\_\_\_\_

## Uhrzeiten

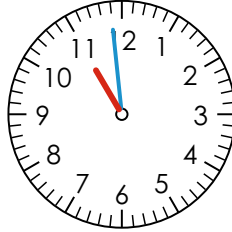
Schreibe beide Uhrzeiten hin. Kontrolliere auf der Rückseite die Lösung selbst.



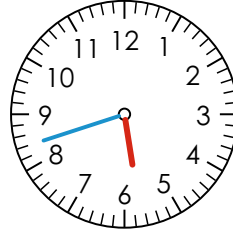
12:44 Uhr



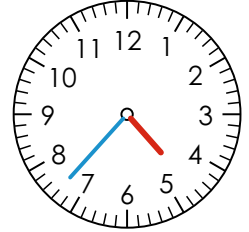
6:07 Uhr



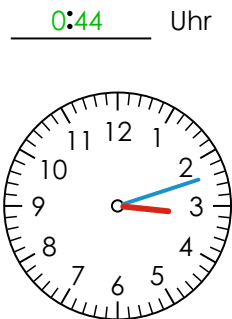
10:59 Uhr



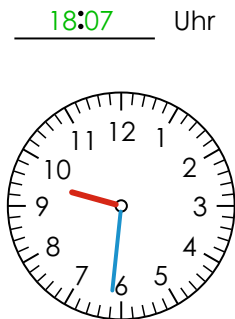
5:42 Uhr




4:37 Uhr




0:44 Uhr




18:07 Uhr



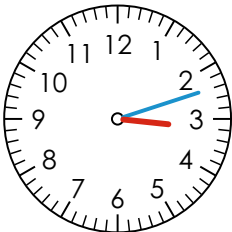
22:59 Uhr



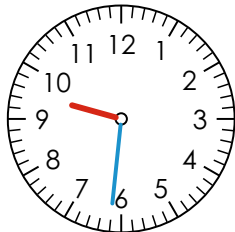
17:42 Uhr



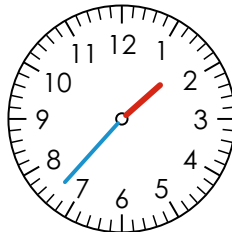
16:37 Uhr



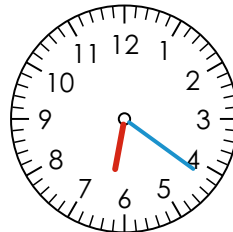
3:12 Uhr



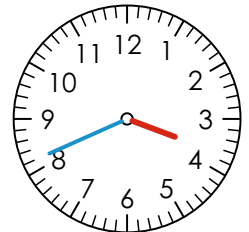
9:31 Uhr



1:37 Uhr



6:21 Uhr



3:41 Uhr

15:12 Uhr

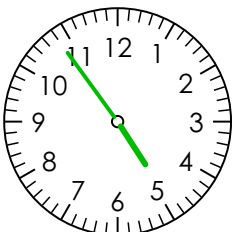
21:31 Uhr

13:37 Uhr

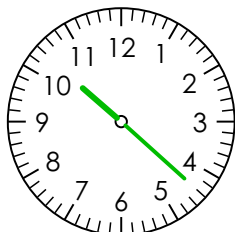
18:21 Uhr

15:41 Uhr

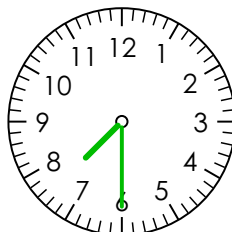
Zeichne die Zeiger ein. Achte darauf, dass der Minutenzeiger blau und der Stundenzeiger rot ist. Der Stundenzeiger ist kürzer als der Minutenzeiger und „wandert mit“! Kontrolliere die Lösung auf der Rückseite.



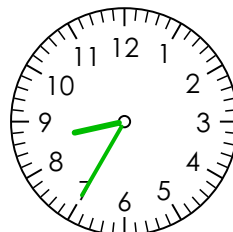
4:54 Uhr



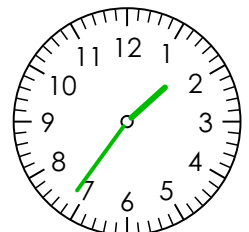
10:22 Uhr



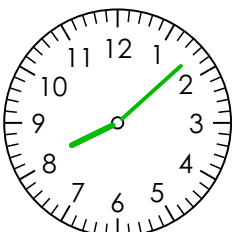
7:30 Uhr



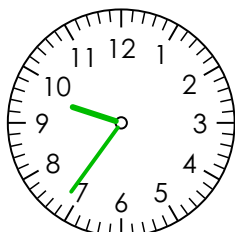
20:35 Uhr



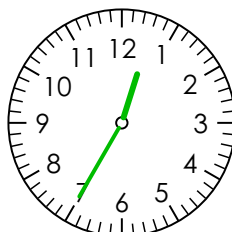
1:36 Uhr



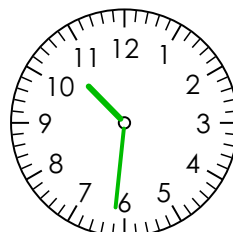
20:08 Uhr



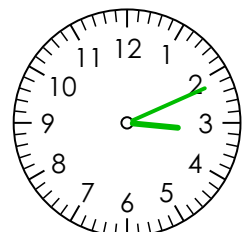
9:36 Uhr



12:35 Uhr

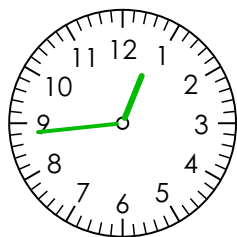


10:31 Uhr

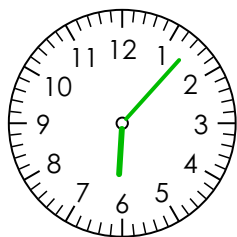


3:11 Uhr

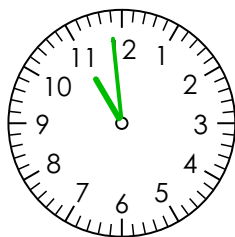
Zeichne die Zeiger richtig ein. Unten findest du die LÖSUNG der Vorderseite.



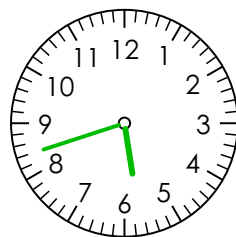
12:44 Uhr



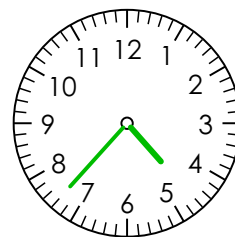
6:07 Uhr



10:59 Uhr



5:42 Uhr



4:37 Uhr

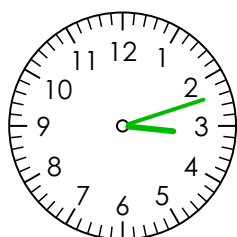
0:44 Uhr

18:07 Uhr

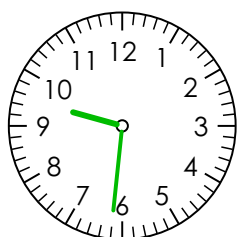
22:59 Uhr

17:42 Uhr

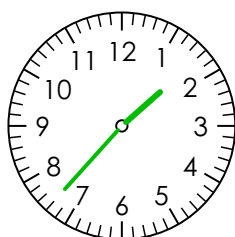
16:37 Uhr



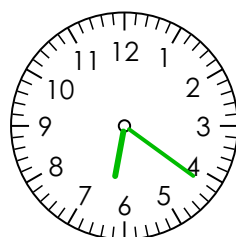
3:12 Uhr




9:31 Uhr



1:37 Uhr



6:21 Uhr



3:41 Uhr

15:12 Uhr

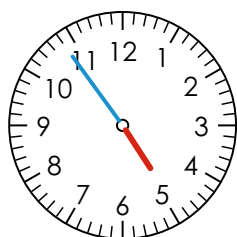
21:31 Uhr

13:37 Uhr

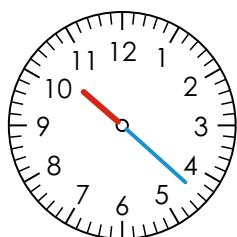
18:21 Uhr

15:41 Uhr

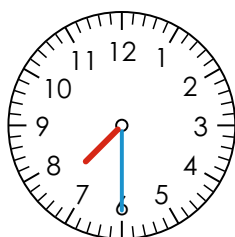
Hier findest du die LÖSUNG der Zeiger. Schreibe die richtige Uhrzeit darunter. Vergleiche mit der Vorderseite.



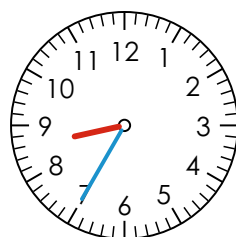
4:54 Uhr



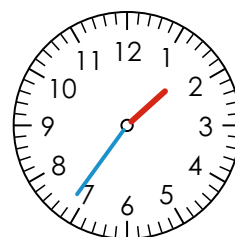
10:22 Uhr



7:30 Uhr



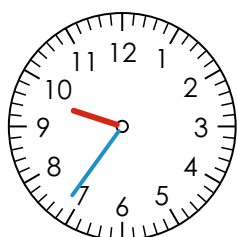
20:35 Uhr



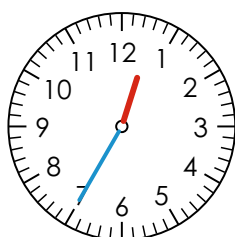
1:36 Uhr



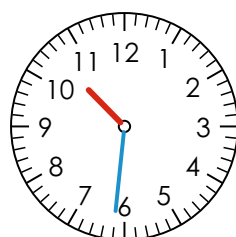
20:08 Uhr



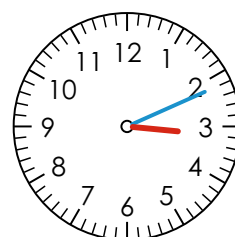
9:36 Uhr



12:35 Uhr



10:31 Uhr



3:11 Uhr