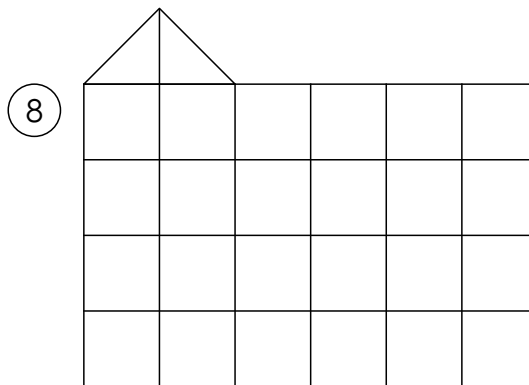


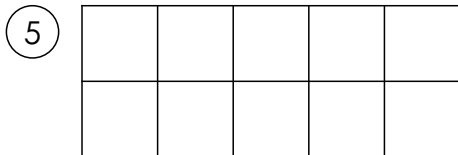
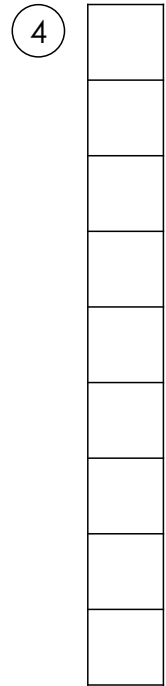
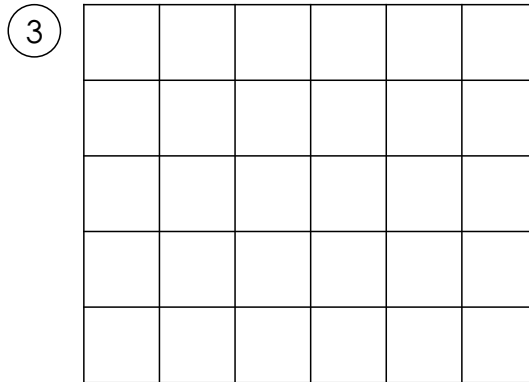
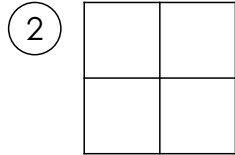
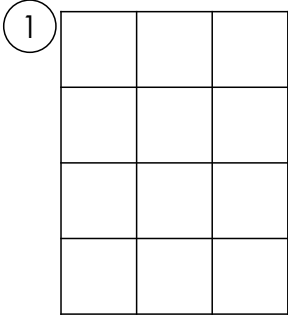


Name: \_\_\_\_\_

Datum: \_\_\_\_\_

## Flächeninhalt und Umfang

Ziehe den Umfang mit einem blauen Stift nach. Bemale die Fläche rot.  
Bestimme den Flächeninhalt  $A=$  und den Umfang  $u=$  für diese Figuren.  
Trage die Ergebnisse mit Einheit in die Tabelle ein.



Figur	u=	A=
1	14 cm	12 cm <sup>2</sup>
2		
3		
4		
5		
6		
7		
8	XXXXXXXXXXXXXXXXXXXX	