


Datum: _____


Name: _____



Uhrzeiten


Wie spät ist es?

Schreibe beide Uhrzeiten (Vormittag, Nachmittag/Abend) auf.




_____ Uhr

_____ Uhr




_____ Uhr

_____ Uhr




_____ Uhr

_____ Uhr




_____ Uhr

_____ Uhr




_____ Uhr

_____ Uhr




_____ Uhr

_____ Uhr




_____ Uhr

_____ Uhr




_____ Uhr

_____ Uhr




_____ Uhr

_____ Uhr




_____ Uhr

_____ Uhr




_____ Uhr

_____ Uhr




_____ Uhr

_____ Uhr




_____ Uhr

_____ Uhr



_____ Uhr

_____ Uhr





_____ Uhr


_____ Uhr

Uhrzeiten


Zusatz-Aufgabe




_____ Uhr




_____ Uhr



_____ Uhr



_____ Uhr



_____ Uhr


_____ Uhr

_____ Uhr


_____ Uhr

_____ Uhr


_____ Uhr




_____ Uhr




_____ Uhr



_____ Uhr



_____ Uhr



_____ Uhr


_____ Uhr

_____ Uhr


_____ Uhr

_____ Uhr


_____ Uhr




_____ Uhr




_____ Uhr



_____ Uhr



_____ Uhr



_____ Uhr


_____ Uhr

_____ Uhr


_____ Uhr

_____ Uhr


_____ Uhr




_____ Uhr




_____ Uhr



_____ Uhr



_____ Uhr



_____ Uhr

_____ Uhr

_____ Uhr

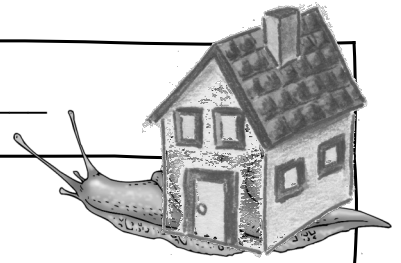
_____ Uhr

_____ Uhr

_____ Uhr

Datum: _____


Name: _____



Uhrzeiten


Wie spät ist es?

Schreibe beide Uhrzeiten (Vormittag, Nachmittag/Abend) auf.




_____ Uhr

_____ Uhr




_____ Uhr

_____ Uhr




_____ Uhr

_____ Uhr




_____ Uhr

_____ Uhr




_____ Uhr

_____ Uhr




_____ Uhr

_____ Uhr




_____ Uhr

_____ Uhr




_____ Uhr

_____ Uhr




_____ Uhr

_____ Uhr




_____ Uhr

_____ Uhr




_____ Uhr

_____ Uhr




_____ Uhr

_____ Uhr




_____ Uhr

_____ Uhr



_____ Uhr



_____ Uhr



_____ Uhr


_____ Uhr

Uhrzeiten




_____ Uhr

_____ Uhr




_____ Uhr

_____ Uhr




_____ Uhr

_____ Uhr



_____ Uhr

_____ Uhr




_____ Uhr

_____ Uhr




_____ Uhr

_____ Uhr




_____ Uhr

_____ Uhr




_____ Uhr

_____ Uhr




_____ Uhr

_____ Uhr




_____ Uhr

_____ Uhr




_____ Uhr

_____ Uhr




_____ Uhr

_____ Uhr




_____ Uhr

_____ Uhr




_____ Uhr

_____ Uhr




_____ Uhr

_____ Uhr




_____ Uhr

_____ Uhr




_____ Uhr

_____ Uhr




_____ Uhr

_____ Uhr



_____ Uhr

_____ Uhr




_____ Uhr

_____ Uhr

Datum: _____

Name: _____


2




Uhrzeiten - Zeiger einsetzen

Zeichne die Zeiger ein. Der Stundenzeiger ist rot, der Minutenzeiger blau.
Verwende ein Lineal!


Schreibe die Vormittags- oder Nachmittags-/Abendzeit dazu.



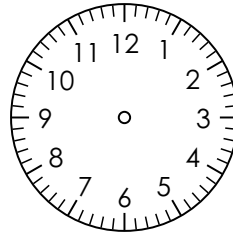
9:00 Uhr




3:00 Uhr




22:00 Uhr




2:00 Uhr




20:00 Uhr




7:30 Uhr



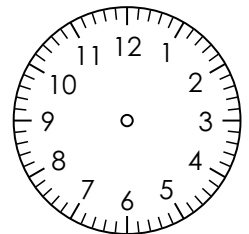
22:00 Uhr



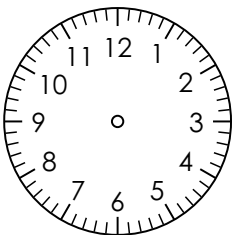
5:00 Uhr



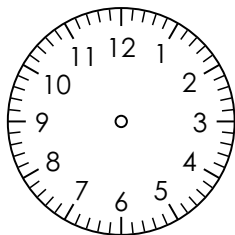
12:30 Uhr




11:30 Uhr




14:45 Uhr



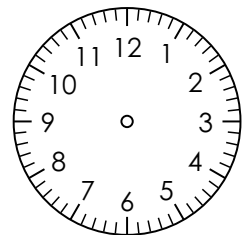
3:30 Uhr



1:00 Uhr





10:30 Uhr




10:15 Uhr

Zeiger zeichnen


Zusatz-Aufgabe




2:45 Uhr



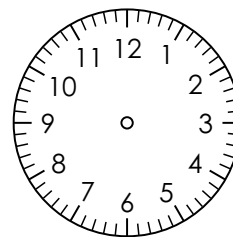
9:30 Uhr




16:45 Uhr




18:45 Uhr



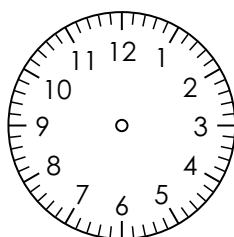
6:15 Uhr



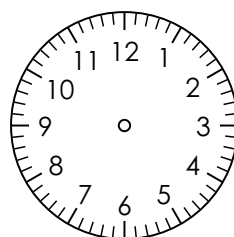
1:30 Uhr




0:15 Uhr




0:45 Uhr




16:45 Uhr




17:15 Uhr




13:30 Uhr




15:30 Uhr




20:30 Uhr




12:30 Uhr




1:45 Uhr




6:00 Uhr




0:45 Uhr



22:45 Uhr



23:45 Uhr




15:45 Uhr

Datum: _____


Name: _____

3




Uhrzeiten - Zeiger einsetzen


Zeichne die Zeiger ein. Der Stundenzeiger ist rot, der Minutenzeiger blau.
Verwende ein Lineal! Arbeite genau!
Schreibe die Vormittags- oder Nachmittags-/Abendzeit dazu.



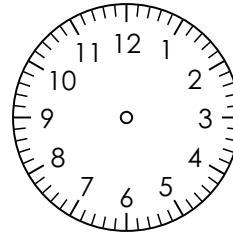
_____ Uhr




_____ Uhr



_____ Uhr



4:15 Uhr



_____ Uhr


22:33 Uhr

0:21 Uhr


0:12 Uhr

_____ Uhr


23:31 Uhr



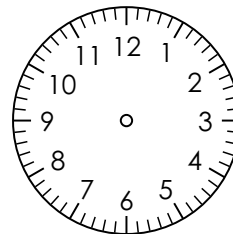
_____ Uhr




_____ Uhr



6:29 Uhr



_____ Uhr



_____ Uhr

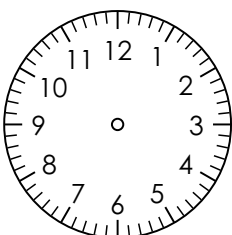
15:34 Uhr

13:32 Uhr


_____ Uhr

18:40 Uhr


21:04 Uhr




_____ Uhr




9:32 Uhr



8:56 Uhr



_____ Uhr



6:41 Uhr

20:36 Uhr

_____ Uhr



_____ Uhr

15:16 Uhr


_____ Uhr

Zeiger zeichnen


Zusatz-Aufgabe



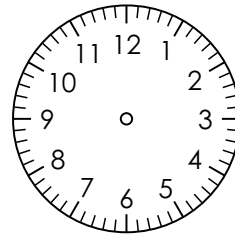
11:24 Uhr




3:45 Uhr



8:10 Uhr



_____ Uhr



_____ Uhr


_____ Uhr

_____ Uhr


_____ Uhr

22:16 Uhr


20:19 Uhr




2:58 Uhr




8:58 Uhr



9:41 Uhr



10:41 Uhr



2:43 Uhr

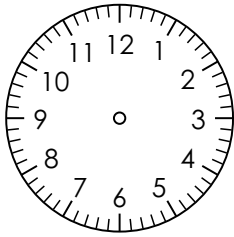
_____ Uhr

_____ Uhr


_____ Uhr

_____ Uhr


_____ Uhr



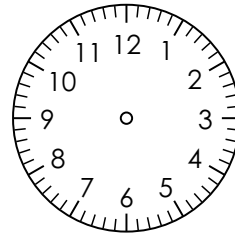
_____ Uhr



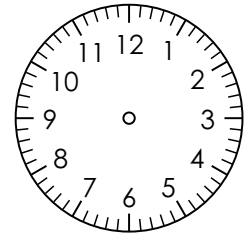
_____ Uhr



5:54 Uhr



_____ Uhr



_____ Uhr

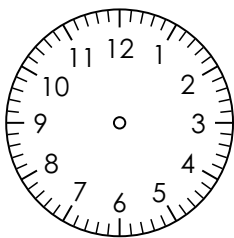
0:34 Uhr

19:50 Uhr


_____ Uhr

13:44 Uhr


15:41 Uhr




9:40 Uhr



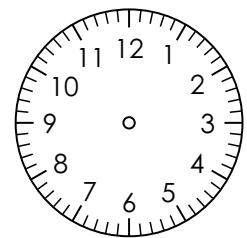
_____ Uhr



7:56 Uhr



_____ Uhr



_____ Uhr

_____ Uhr

22:34 Uhr


_____ Uhr

23:16 Uhr

15:34 Uhr


Datum: _____

Name: _____




Uhrzeiten richtig sagen

Wie nennt man diese Uhrzeit? Kreuze an.



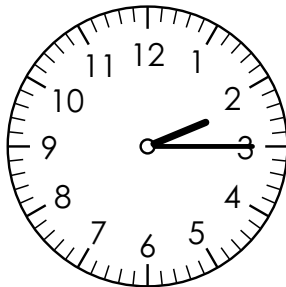
_____ Uhr

- Es ist halb drei.
- Es ist sechs Uhr.
- Es ist 18 Minuten nach sechs Uhr.
- Es ist halb vier.




_____ Uhr

- Es ist viertel sieben.
- Es ist dreiviertel sieben.
- Es ist dreiviertel acht.
- Es ist dreiviertel sechs.




_____ Uhr

- Es ist viertel zwei.
- Es ist halb drei.
- Es ist viertel drei.
- Es ist 10 Minuten nach drei.


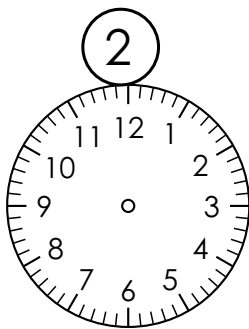

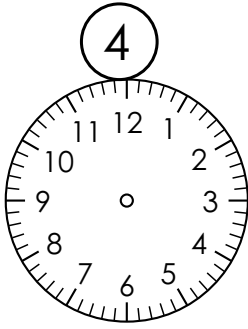


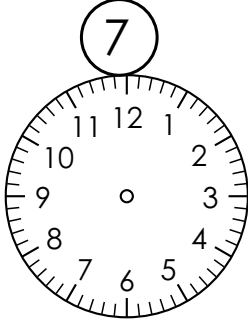




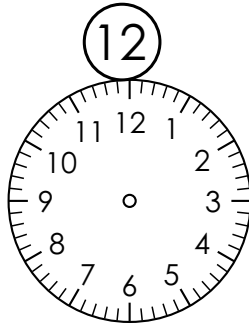


_____ Uhr

- Es ist dreiviertel fünf.
- Es ist dreiviertel vier.
- Es ist halb fünf.
- Es ist neun Uhr.




Lies die Uhrzeit in Worten und zeichne die Zeiger richtig ein.
Stundenzeiger sind rot, Minutenzeiger sind blau. Benutze ein Lineal.
Schreibe die digitale Uhrzeit darunter.

1. Es ist fünf Uhr.			
2. Es ist zwei Uhr.			
3. Es ist halb elf.	_____ Uhr	_____ Uhr	_____ Uhr
4. Es ist halb zehn.			
5. Es ist viertel drei.			
6. Es ist acht Uhr.	_____ Uhr	_____ Uhr	_____ Uhr
7. Es ist halb sieben.			
8. Es ist dreiviertel neun.			
9. Es ist Mitternacht.	_____ Uhr	_____ Uhr	_____ Uhr
10. Es ist vier Uhr.			
11. Es ist halb eins.			
12. Es ist dreiviertel acht.	_____ Uhr	_____ Uhr	_____ Uhr

Datum: _____


Name: _____




Uhrzeiten

Wie spät ist es?


Schreibe beide Uhrzeiten (Vormittag, Nachmittag/Abend) auf.




4:00 Uhr




3:00 Uhr



8:00 Uhr



7:00 Uhr



8:00 Uhr

16:00 Uhr

15:00 Uhr

20:00 Uhr

19:00 Uhr


20:00 Uhr




8:00 Uhr




7:30 Uhr



2:00 Uhr



8:30 Uhr



5:00 Uhr


20:00 Uhr

19:30 Uhr


14:00 Uhr

20:30 Uhr


17:00 Uhr




7:30 Uhr




3:00 Uhr



6:30 Uhr



4:45 Uhr



3:45 Uhr

19:30 Uhr

15:00 Uhr



18:30 Uhr

16:45 Uhr


15:45 Uhr

Uhrzeiten

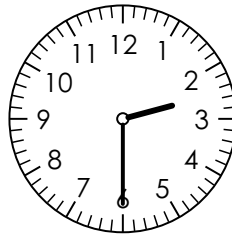
Zusatz-Aufgabe




9:45 Uhr




7:45 Uhr



2:30 Uhr



7:45 Uhr



3:30 Uhr


21:45 Uhr

19:45 Uhr

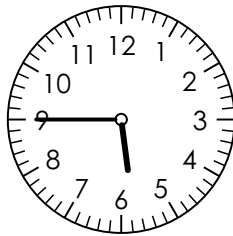
14:30 Uhr

19:45 Uhr


15:30 Uhr




12:45 Uhr




5:45 Uhr



11:00 Uhr



8:00 Uhr



9:00 Uhr

0:45 Uhr

17:45 Uhr


23:00 Uhr

20:00 Uhr


21:00 Uhr




2:30 Uhr




3:45 Uhr



9:00 Uhr



8:00 Uhr



10:00 Uhr


14:30 Uhr

15:45 Uhr


21:00 Uhr

20:00 Uhr


22:00 Uhr




6:30 Uhr




9:15 Uhr



11:15 Uhr



10:30 Uhr



2:30 Uhr

18:30 Uhr

21:15 Uhr

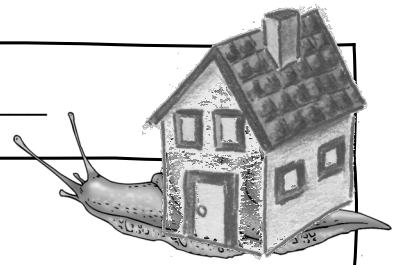
23:15 Uhr

22:30 Uhr

14:30 Uhr

Datum: _____


Name: _____




Uhrzeiten

Wie spät ist es?


Schreibe beide Uhrzeiten (Vormittag, Nachmittag/Abend) auf.




2:00 Uhr




6:00 Uhr



5:00 Uhr



6:00 Uhr



4:00 Uhr


14:00 Uhr

18:00 Uhr


17:00 Uhr

18:00 Uhr


16:00 Uhr




6:00 Uhr




7:30 Uhr



5:30 Uhr



4:00 Uhr



8:30 Uhr


18:00 Uhr

19:30 Uhr


17:30 Uhr

16:00 Uhr


20:30 Uhr




9:15 Uhr




8:15 Uhr



7:45 Uhr



11:00 Uhr



8:00 Uhr

21:15 Uhr



20:15 Uhr

19:45 Uhr


23:00 Uhr

20:00 Uhr


Uhrzeiten




1:30 Uhr




5:30 Uhr



4:15 Uhr



7:00 Uhr



4:30 Uhr

13:30 Uhr

17:30 Uhr


16:15 Uhr

19:00 Uhr


16:30 Uhr




7:00 Uhr




7:00 Uhr



10:45 Uhr



11:00 Uhr



9:00 Uhr


19:00 Uhr

19:00 Uhr


22:45 Uhr

23:00 Uhr


21:00 Uhr




11:45 Uhr




7:45 Uhr



5:30 Uhr



12:15 Uhr



3:15 Uhr


23:45 Uhr

19:45 Uhr


17:30 Uhr

0:15 Uhr


15:15 Uhr




4:45 Uhr




8:00 Uhr



11:30 Uhr



8:15 Uhr



3:15 Uhr

16:45 Uhr

20:00 Uhr

23:30 Uhr


20:15 Uhr

15:15 Uhr

Datum: _____

Name: _____

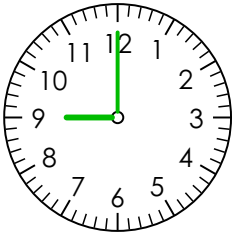
2



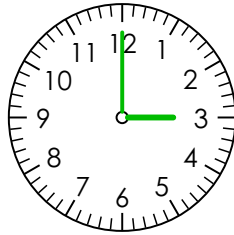
Uhrzeiten - Zeiger einsetzen

Zeichne die Zeiger ein. Der Stundenzeiger ist rot, der Minutenzeiger blau.
Verwende ein Lineal!

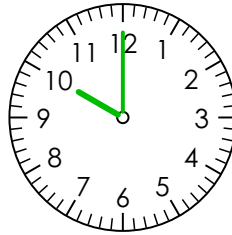
Schreibe die Vormittags- oder Nachmittags-/Abendzeit dazu.



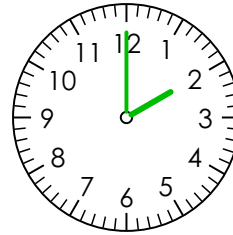
9:00 Uhr



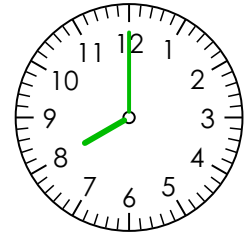
3:00 Uhr



10:00 Uhr



2:00 Uhr



8:00 Uhr

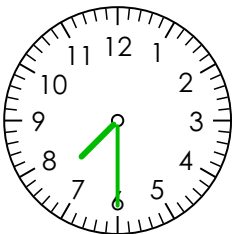
21:00 Uhr

15:00 Uhr


22:00 Uhr

14:00 Uhr

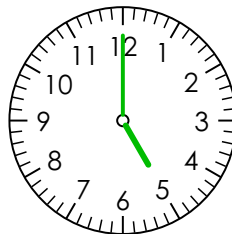
20:00 Uhr



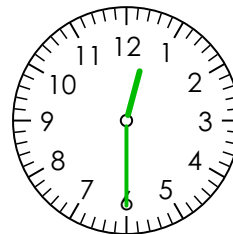
7:30 Uhr



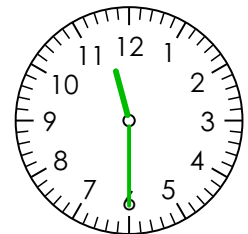
10:00 Uhr



5:00 Uhr



12:30 Uhr



11:30 Uhr

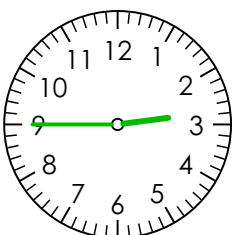
19:30 Uhr

22:00 Uhr

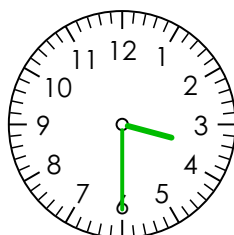
17:00 Uhr

0:30 Uhr

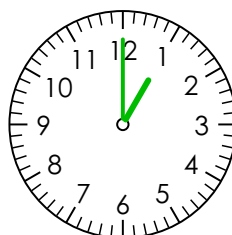
23:30 Uhr



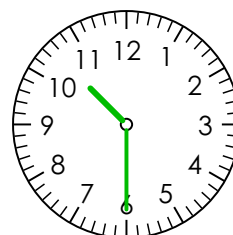
2:45 Uhr



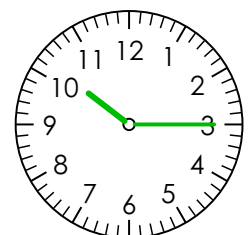
3:30 Uhr



1:00 Uhr



10:30 Uhr



10:15 Uhr

14:45 Uhr

15:30 Uhr

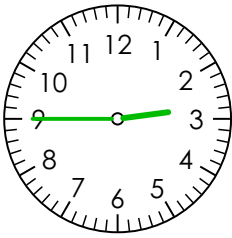

13:00 Uhr

22:30 Uhr

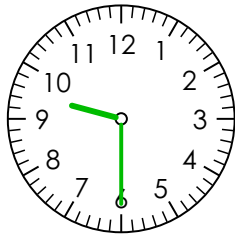
22:15 Uhr

Zeiger zeichnen

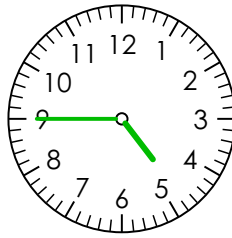
Zusatz-Aufgabe



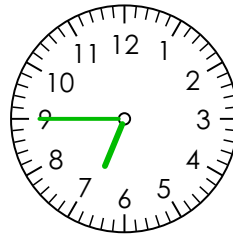
2:45 Uhr



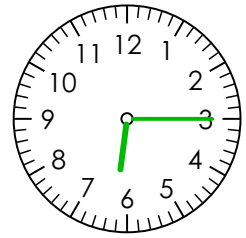
9:30 Uhr



4:45 Uhr



6:45 Uhr



6:15 Uhr

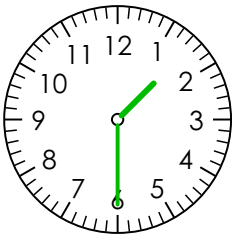
14:45 Uhr

21:30 Uhr

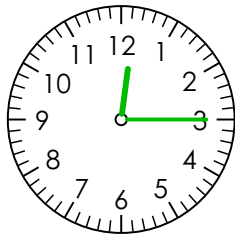
16:45 Uhr

18:45 Uhr

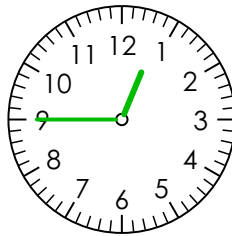
18:15 Uhr



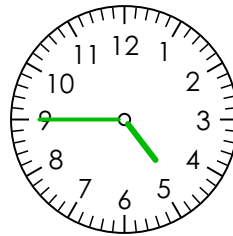
1:30 Uhr



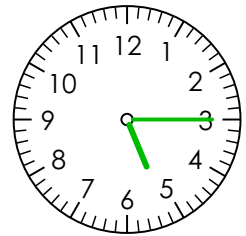
12:15 Uhr



12:45 Uhr



4:45 Uhr



5:15 Uhr

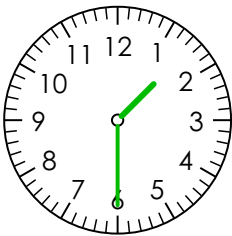
13:30 Uhr

0:15 Uhr

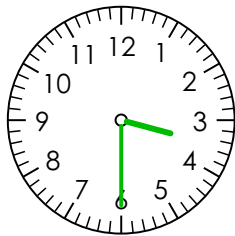
0:45 Uhr

16:45 Uhr

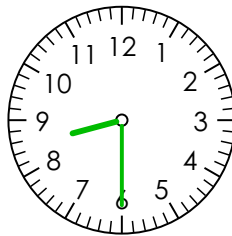
17:15 Uhr



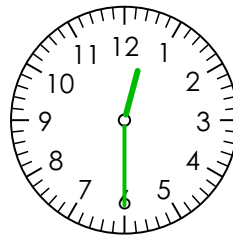
1:30 Uhr



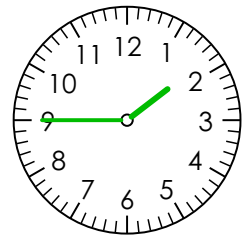
3:30 Uhr



8:30 Uhr



12:30 Uhr



1:45 Uhr

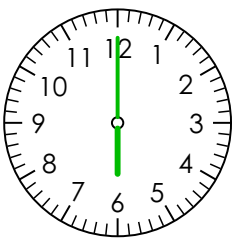
13:30 Uhr

15:30 Uhr

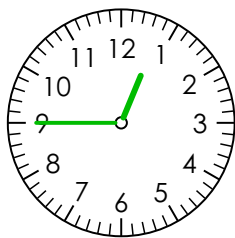
20:30 Uhr

0:30 Uhr

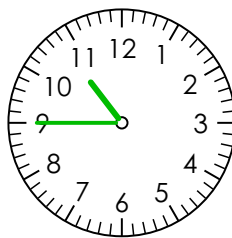
13:45 Uhr



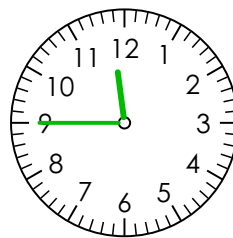
6:00 Uhr



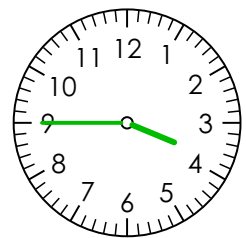
12:45 Uhr



10:45 Uhr



11:45 Uhr



3:45 Uhr

18:00 Uhr

0:45 Uhr

22:45 Uhr


23:45 Uhr

15:45 Uhr

Datum: _____

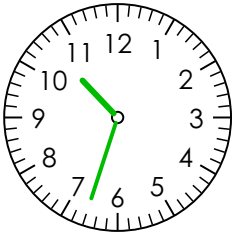
Name: _____

3



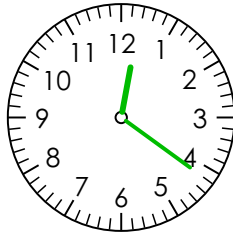
Uhrzeiten - Zeiger einsetzen

Zeichne die Zeiger ein. Der Stundenzeiger ist rot, der Minutenzeiger blau.
Verwende ein Lineal! Arbeite genau!
Schreibe die Vormittags- oder Nachmittags-/Abendzeit dazu.



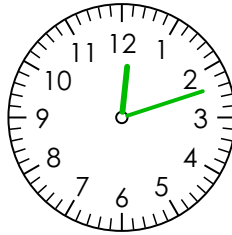
10:33 Uhr

22:33 Uhr



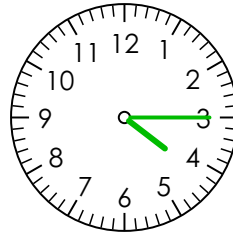
12:21 Uhr

0:21 Uhr



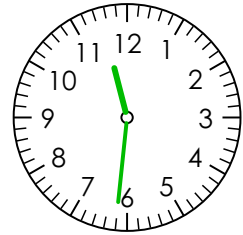
12:12 Uhr

0:12 Uhr



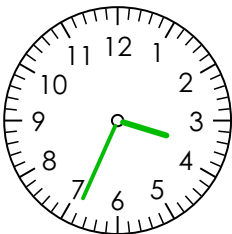
4:15 Uhr

16:15 Uhr



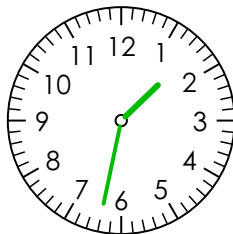
11:31 Uhr

23:31 Uhr



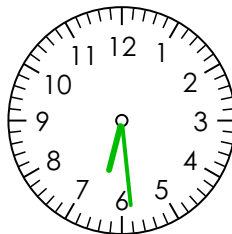
3:34 Uhr

15:34 Uhr



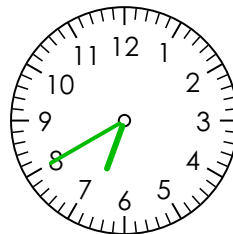
1:32 Uhr

13:32 Uhr



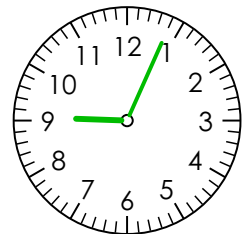
6:29 Uhr

18:29 Uhr



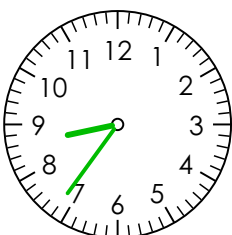
6:40 Uhr

18:40 Uhr



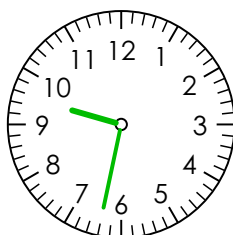
9:04 Uhr

21:04 Uhr



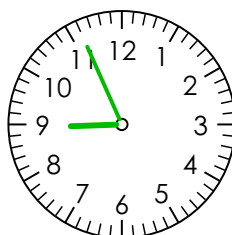
8:36 Uhr

20:36 Uhr



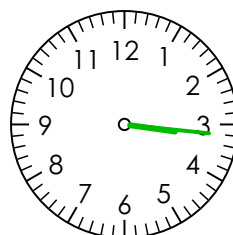
9:32 Uhr

21:32 Uhr



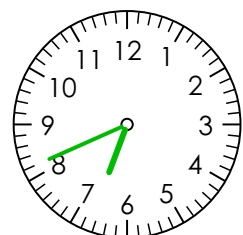
8:56 Uhr

20:56 Uhr



3:16 Uhr

15:16 Uhr

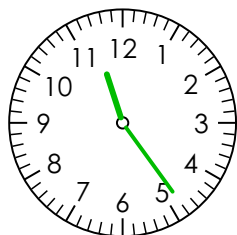



6:41 Uhr

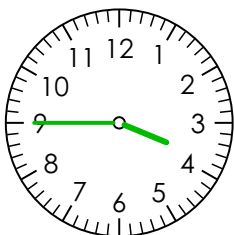
18:41 Uhr

Zeiger zeichnen

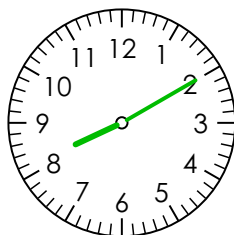
Zusatz-Aufgabe



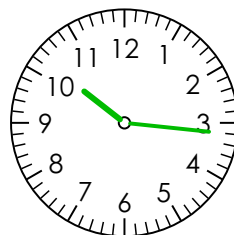
11:24 Uhr



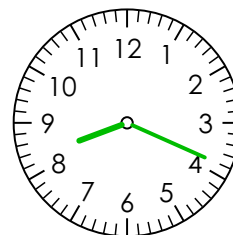
3:45 Uhr



8:10 Uhr



10:16 Uhr



8:19 Uhr

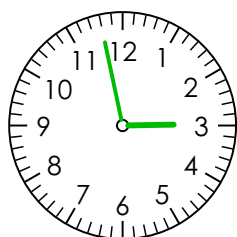
23:24 Uhr

15:45 Uhr

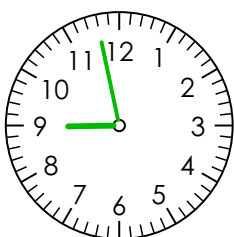
20:10 Uhr

22:16 Uhr

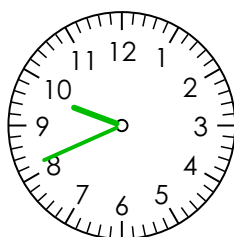
20:19 Uhr



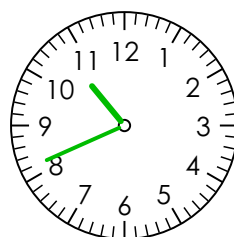
2:58 Uhr



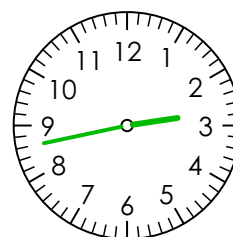
8:58 Uhr



9:41 Uhr



10:41 Uhr



2:43 Uhr

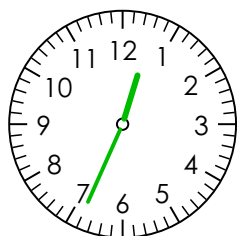
14:58 Uhr

20:58 Uhr

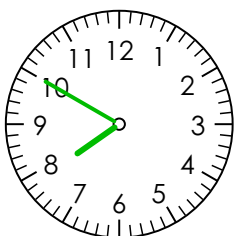
21:41 Uhr

22:41 Uhr

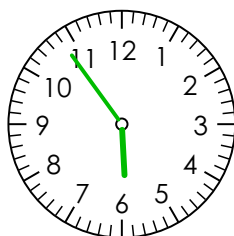
14:43 Uhr



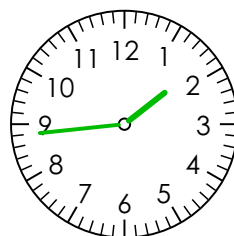
12:34 Uhr



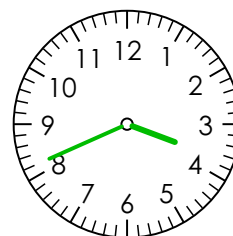
7:50 Uhr



5:54 Uhr



1:44 Uhr



3:41 Uhr

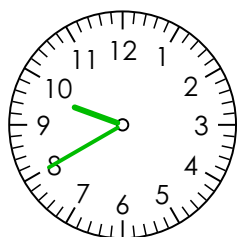
0:34 Uhr

19:50 Uhr

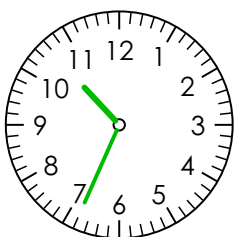
17:54 Uhr

13:44 Uhr

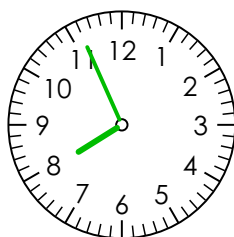
15:41 Uhr



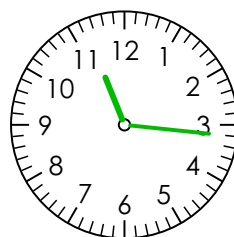
9:40 Uhr



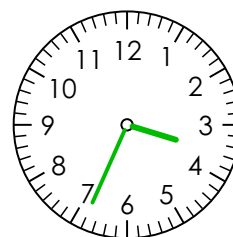
10:34 Uhr



7:56 Uhr



11:16 Uhr



3:34 Uhr

21:40 Uhr

22:34 Uhr


19:56 Uhr

23:16 Uhr

15:34 Uhr


Datum: _____

Name: _____




Uhrzeiten richtig sagen

Wie nennt man diese Uhrzeit? Kreuze an.




3:30 Uhr

- Es ist halb drei.
- Es ist sechs Uhr.
- Es ist 18 Minuten nach sechs Uhr.
- Es ist halb vier.




6:45 Uhr

- Es ist viertel sieben.
- Es ist dreiviertel sieben.
- Es ist dreiviertel acht.
- Es ist dreiviertel sechs.




14:15 Uhr

- Es ist viertel zwei.
- Es ist halb drei.
- Es ist viertel drei.
- Es ist 10 Minuten nach drei.


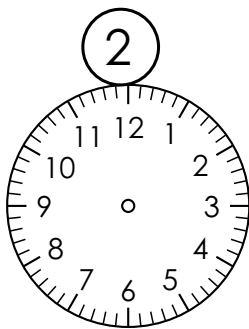

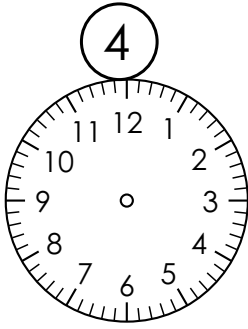


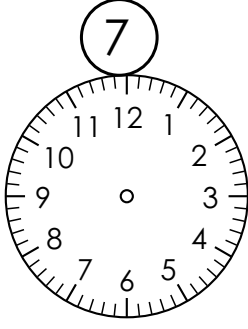




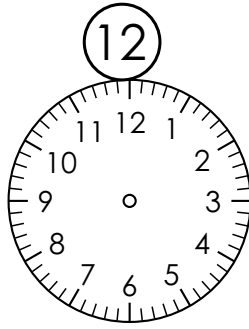


16:45 Uhr

- Es ist dreiviertel fünf.
- Es ist dreiviertel vier.
- Es ist halb fünf.
- Es ist neun Uhr.



Lies die Uhrzeit in Worten und zeichne die Zeiger richtig ein.
Stundenzeiger sind rot, Minutenzeiger sind blau. Benutze ein Lineal.
Schreibe die digitale Uhrzeit darunter.

1. Es ist fünf Uhr.			
2. Es ist zwei Uhr.			
3. Es ist halb elf.	_____ Uhr	_____ Uhr	_____ Uhr
4. Es ist halb zehn.			
5. Es ist viertel drei.			
6. Es ist acht Uhr.	_____ Uhr	_____ Uhr	_____ Uhr
7. Es ist halb sieben.			
8. Es ist dreiviertel neun.			
9. Es ist Mitternacht.	_____ Uhr	_____ Uhr	_____ Uhr
10. Es ist vier Uhr.			
11. Es ist halb eins.			
12. Es ist dreiviertel acht.	_____ Uhr	_____ Uhr	_____ Uhr